

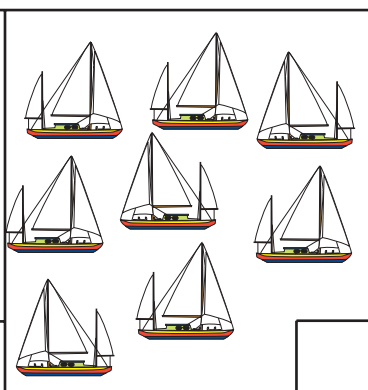

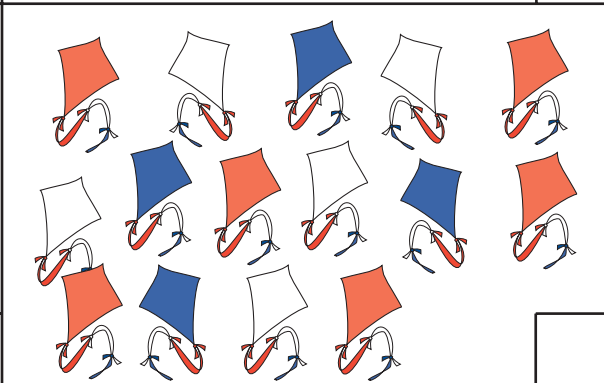
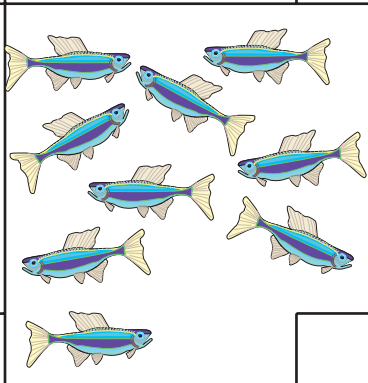



1 Count each set. Write the number.

2 Write the missing numbers.

	0								
				14					
		22							
						37			
									49

3 Write the numbers that come before and after.

___ 8 ___	___ 15 ___	___ 22 ___	___ 37 ___
___ 41 ___	___ 50 ___	___ 64 ___	___ 73 ___

4 Write the letters on the blanks.

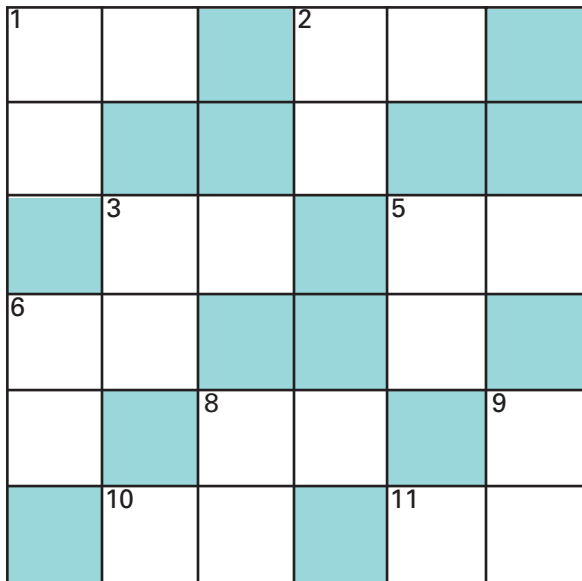
second E
 sixth M
 tenth C

seventh E
 third L
 ninth A

fourth C
 fifth O
 eleventh K

first W
 eighth B

5



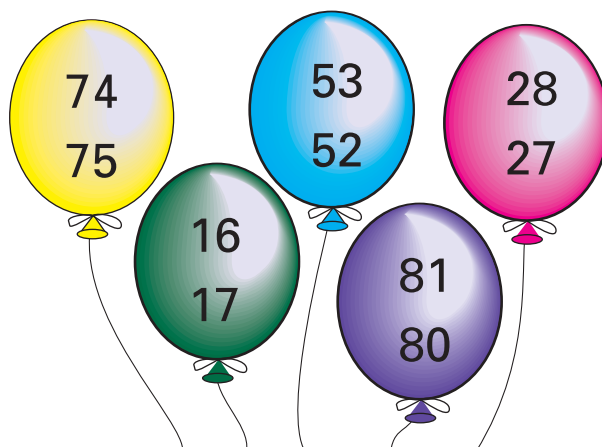
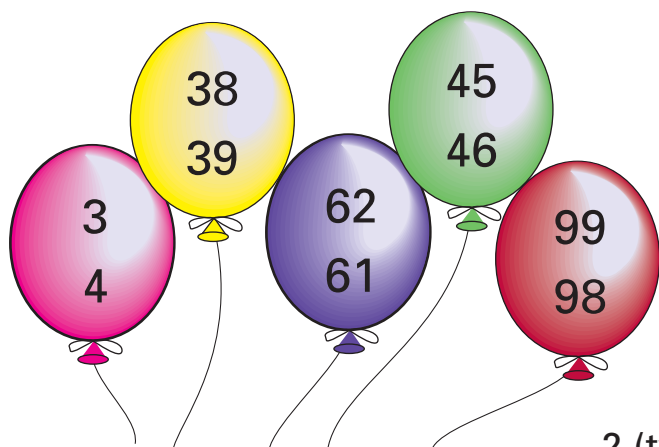
Across

1. The number before 35
2. $68 - 1 =$
3. The number after 13
5. $82 + 1 =$
6. The number after 49
8. $73 - 1 =$
10. The number before 61
11. $24 + 1 =$

Down


1. $38 + 1 =$
2. The number after 61
3. $11 - 1 =$
5. $90 - 1 =$
6. The number after 57
8. $69 + 1 =$
9. The number before 16

6 Circle the larger numbers.

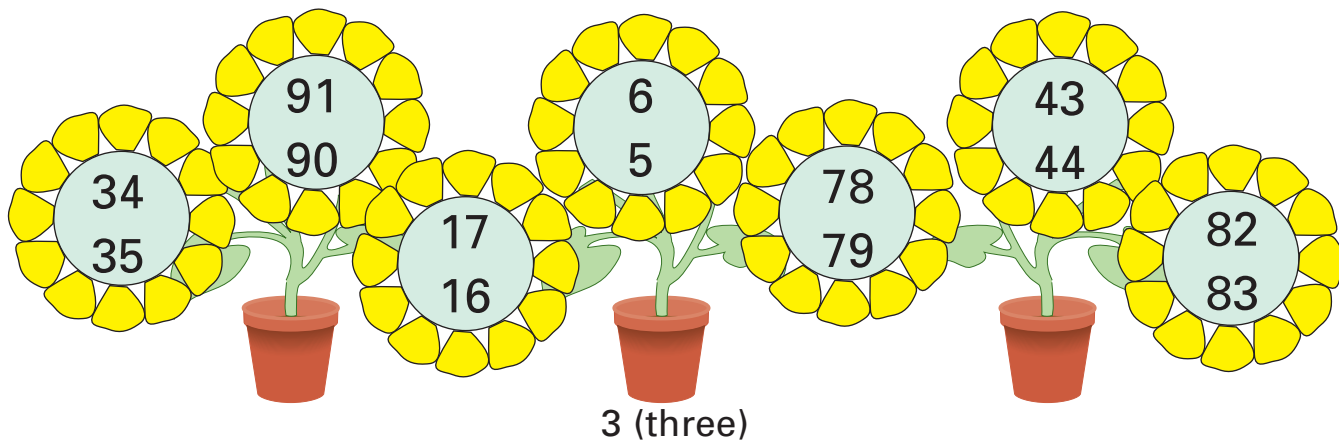


2 (two)

1 Connect the dots.




2 Circle the smaller number.



3 Write the missing numbers.

50									
			63						
						77			
				85					
									99



4 Write the numbers that come before and after.

___ 7 ___	___ 13 ___	___ 21 ___	___ 80 ___
___ 46 ___	___ 59 ___	___ 68 ___	___ 92 ___

5 Match the ordinal numbers.


first	3rd	sixth	7th
second	5th	seventh	10th
third	2nd	eighth	6th
fourth	1st	ninth	8th
fifth	4th	tenth	9th

6 Count each set. Write the number.

<input type="text"/>	<input type="text"/>	<input type="text"/>

4 (four)

1 Make a tally mark for each object.



2 Write the number that is one more.

60 _____
18 _____
47 _____

39 _____
6 _____
72 _____

24 _____
77 _____
51 _____

85 _____
96 _____
33 _____

3 Write the number that is one less.

_____ 23
_____ 76
_____ 40

_____ 89
_____ 17
_____ 56

_____ 54
_____ 95
_____ 32

_____ 38
_____ 5
_____ 71

4 Write the letters on the blanks.



seventeenth E
 fourth I
 twelfth A
 first B
 fourteenth O
 eighth O


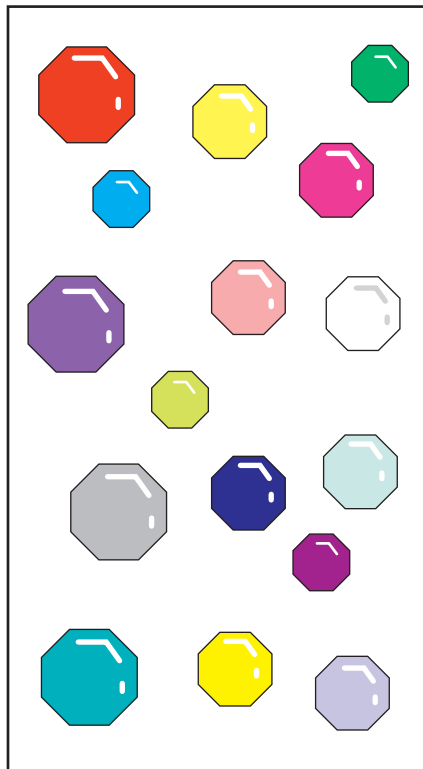

ninth O
 fifth N
 eleventh E
 second E
 eighteenth R
 fifteenth T

sixth D
 tenth N
 third K
 sixteenth H
 thirteenth N
 seventh T

5 Circle 17 stars.

Circle 12 octagons.

Circle 18 cones.



6 Write the numbers in order.

23	25	28	21	27	24	29	22	26
<input type="text"/>	<input type="text"/>	<input type="text"/>	<input type="text"/>	<input type="text"/>	<input type="text"/>	<input type="text"/>	<input type="text"/>	<input type="text"/>